

Graad 2: Week 19 and 20

Afrikaans



Wees veilig



Ministry of Education,
Arts and Culture

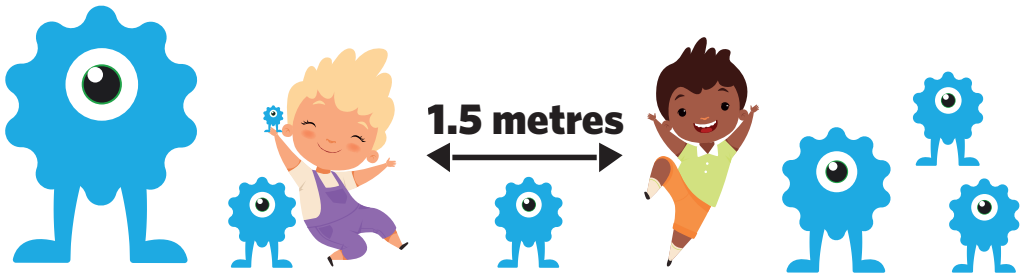


NAMIBIAN
COMMUNITY TRUST



for every child





- | | | | | |
|----------|----------|----------|----------|----------|
| 1 | 2 | 3 | 4 | 5 |
|----------|----------|----------|----------|----------|

These numbers indicate which day you can complete each worksheet! But if you want to, you can work ahead and do the rest as well.

This publication is a collaboration between the Ministry of Education, Arts and Culture and Namibia Media Holdings. This publication is sponsored by the Ministry.

Copyright © Ministry of Education, Arts and Culture. All parts of this publication cannot be reproduced, stored in a retrieval system or transmitted in any form or by any means, electronic, mechanical, photocopying, recording or otherwise without prior permission of the Ministry of Education, Arts and Culture or the Publisher.

Production by: Namibia Media Holdings  **NAMIBIA MEDIA HOLDINGS**

Printing: Newsprint Namibia 



The Ministry of Education, Arts and Culture
www.moe.gov.na



Woordeskat en sigwoorde

Lees die sigwoorde en skryf dit dan neer.

Lees	Teken op die stippellyne	Skryf
eet	eet	
goed	goed	
ja	ja	
hulle	hulle	
veilig	veilig	
vreemdelinge	vreemdelinge	

Week 19

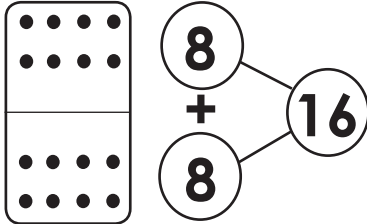
Grad 2



Getal bande van 16

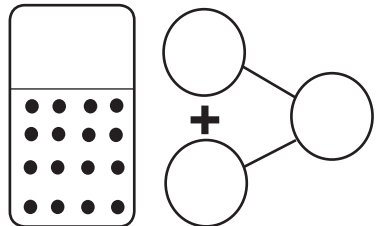
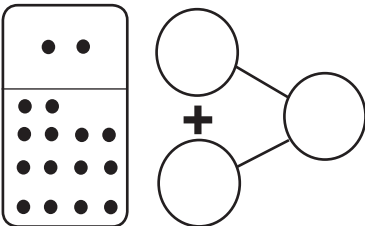
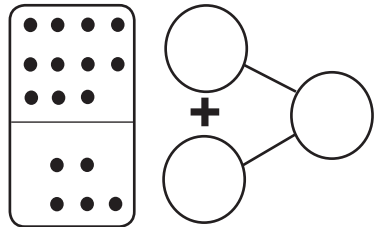
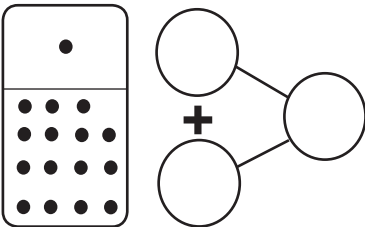
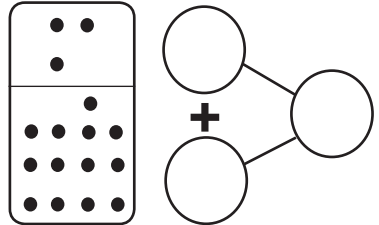
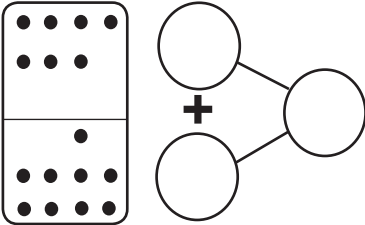
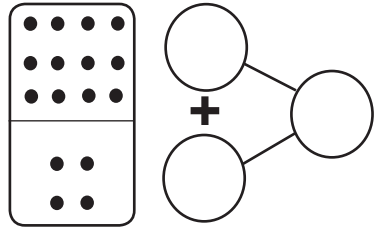
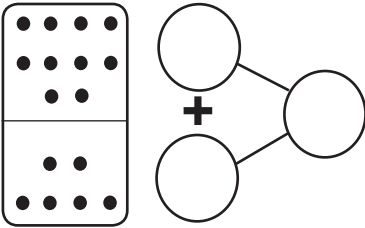
Tel die kolle van elke blok. Skryf hulle neer en tel dit op.

Voorbeeld:



Week 19

Graad 2




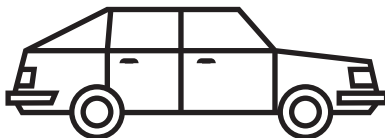
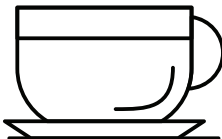

Phonics – c words

Trace the C sound

1. Read, Trace and then write.

Read	Trace	Write
cup	cup	_____
cat	cat	_____
cap	cap	_____
can	can	_____
cot	cot	_____
cut	cut	_____

2. Colour all words that start with c.



Week 19

Grade 2

Vergelyk getalle

Omkring die regte getal en vul dit in.

Onthou:

< = kleiner as

> = groter as

= = gelyk aan

Voorbeeld: $99 < \boxed{100}$
 $19 \quad 89 \quad 100$

a) $33 > \boxed{}$
 $29 \quad 35 \quad 89$

e) $72 < \boxed{}$
 $80 \quad 70 \quad 64$

Week 19

b) $43 = \boxed{}$
 $60 \quad 43 \quad 44$

f) $28 = \boxed{}$
 $20 \quad 18 \quad 28$

Graad 2

c) $45 < \boxed{}$
 $30 \quad 59 \quad 25$

g) $91 > \boxed{}$
 $56 \quad 19 \quad 99$

d) $19 > \boxed{}$
 $35 \quad 10 \quad 22$

h) $55 < \boxed{}$
 $78 \quad 21 \quad 49$



Lees

Lees die storie en beantwoord die vrae.

Huis veiligheids reëls

Hou 'n lap en papier weg van die stoof en enige oop vlamme by jou huis.

Moet nooit water en olie in 'n warm pot sit nie.

Moet nooit 'n mes in die broodrooster sit nie.

Respekteer elektrisiteit, moet nooit aan 'n oop muurprop vat met nat hande nie, of jou apparate naby of in water sit nie.

Moet nie van die trappe af hardloop met iets skerp of breekbaar in jou hande nie.

Wys skerp voorwerpe altyd na die vloer en nie na iemand nie.

Wees versigtig as glas breek. Roep altyd 'n grootmens om jou te kom help skoonmaak.


Bel vir hulp as jy in die moeilikheid is.



Skryf ja of nee

1. Mag ons met vuur speel? _____
2. Mag ons met gebreekte glas speel? _____
3. Mag ons iemand bel as ons in die moeilikheid is?

4. Mag ons van die trappe af hardloop? _____
5. Mag ons muurproppe met nat hande aanraak? _____
6. Mag ons 'n mes in 'n broodrooster druk? _____
7. Wie moet jy bel as jy in die moeilikheid is?



Vergelyk getalle

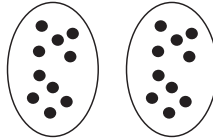
Tel in tiene tot by honderd.

0, 10, _____, _____, _____, _____, _____, _____, _____, _____, 100

1. Gebruik die groepe om die antwoorde te kry.




$1 \times 10 = 10$

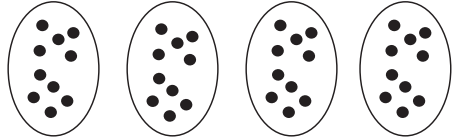


a. $2 \times 10 =$ _____

Week 19

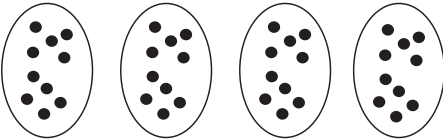


b. $3 \times 10 =$ _____

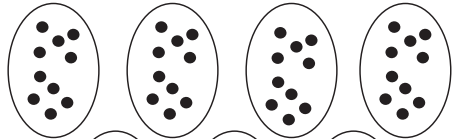


c. $4 \times 10 =$ _____

Graad 2




d. $5 \times 10 =$ _____



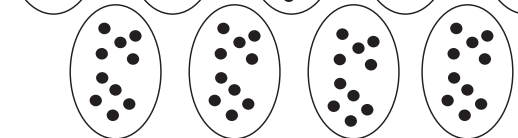
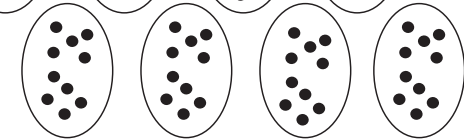
e. $7 \times 10 =$ _____



f. $8 \times 10 =$ _____



g. $9 \times 10 =$ _____

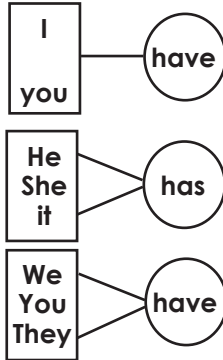


Irregular Verbs (have / has)

For a person name: Tom = has

Fill in the correct word and add **a** or **an** after it.

Remember we use **an** in front of a vowel and **a** in front of a consonant.



Week 19

Grade 2

Example: I **have a** short pen.

You **have a** cute cat

I **have an** apple.

He _____ book.

She _____ wallet.

You _____ key.

She _____ camera.

It _____ red bell.

Kate _____ big bag.

Scott _____ umbrella.



Breuke

Breuke is dele van 'n heel, as die heel in ewe dele verdeel word.
Antwoord elke vraag deur te skryf een heel, een halwe of een kwart.



een heel



een halwe



een kwart

Week 19

Graad 2

Hoeveel van 'n pizza is oor?









Hoeveel van die waatlemoen is oor?







Woord-bou







2-3 letter woorde

1. Lees hardop, en verbind dan die passende woorde.

op	as
aan	op
as	aan
mag	so
so	mag

of	in
by	ons
in	dit
dit	of
ons	by

2. Verbind die letters wat by die prent pas en skryf die woord op die lyn.

	b — e w t o d	
	b k k r o p	_____
	f o p r y t	_____
	p j t k o k	_____
	d o k s a t	_____




Skrif

Volgorde van prente

Nummer die prente in die volgorde wat dit moet verloop.

Gebruik nommers 1,2,3,4.



Skryf nou 'n kort storie oor die prente. Gebruik die volgende spel woorde.

teddie bear

blompot

sokkerbal

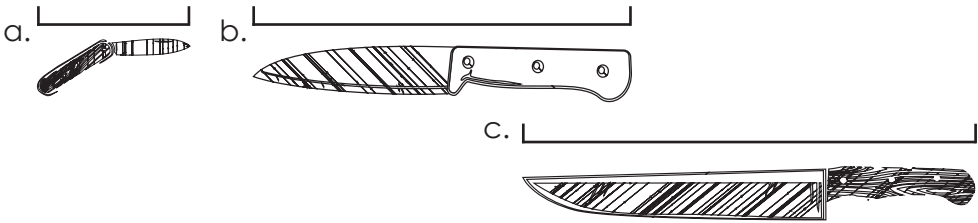
skop

breek/gebreek



Lengte


1. Gebruik 'n linaal om die voorwerpe te meet:



2. Kyk na die prente en beantwoord die vrae.

- a. Watter mes is die langste? _____
- b. Watter mes is die kortste? _____
- c. Watter messe is langer as die sak mes? _____

3. Meet in sentimeters.



4. Meet die lengte van die pyl.



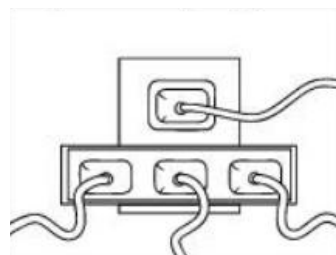
5. Trek 'n lyn korter as die pyl.



Veiligheid

Kleur die prente in wat die veiligste keuse uitwys.

Maak 'n kruis op die prent wat nie die veilige keuse wys nie.



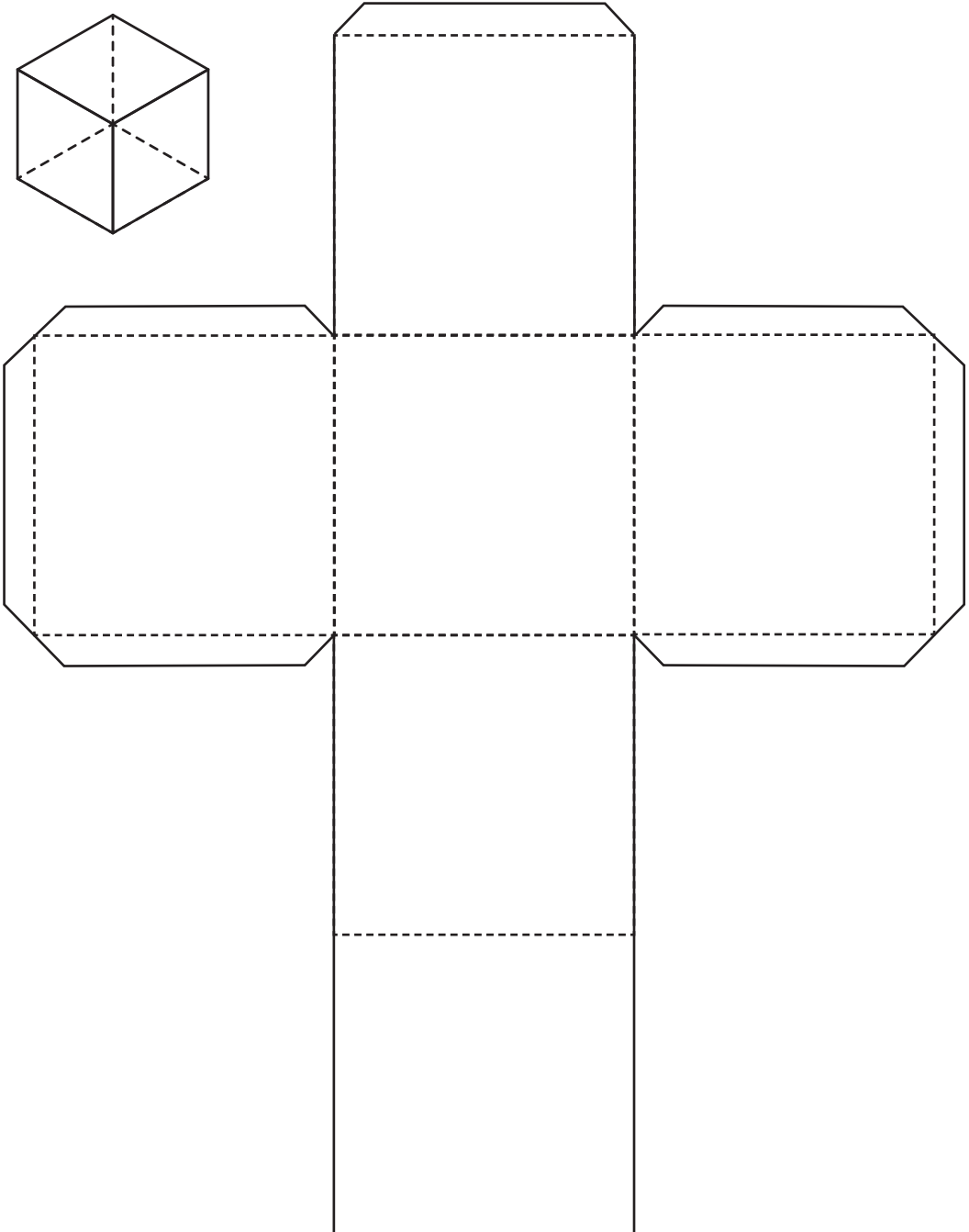
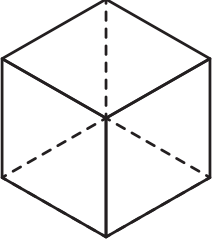
Week 19

Graad 2



Meetkunde – 3D vorms

Knip uit op die lyne en vou op die stippellyne om 'n kubus te vorm.



Week 19

Grad 2





Woordeskat en sigwoorde

Vind die woorde:

eet
gevaarlik

goed
veilig

hulle
vreemd

m	x	q	o	p	h	h	v	c	m
n	u	s	b	s	v	u	b	c	k
g	e	v	a	a	r	l	i	k	i
o	e	e	k	m	e	l	j	d	t
j	t	i	l	v	e	e	d	h	o
p	d	l	o	d	m	g	o	e	d
g	h	i	p	i	d	w	i	p	g
f	b	g	f	l	j	y	u	k	d
v	j	u	k	l	l	d	u	r	e

Skryf kort sinne met die woorde.

eet: _____

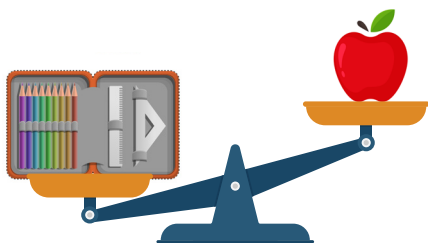
hulle: _____

veilig: _____



Gewig


Kyk na die prente en vul in die oop spasies: swaarder, ligter, of dieselfde.



Die potloodsakkie is _____ as die appel.



Die bottel is _____ as die pak melk.



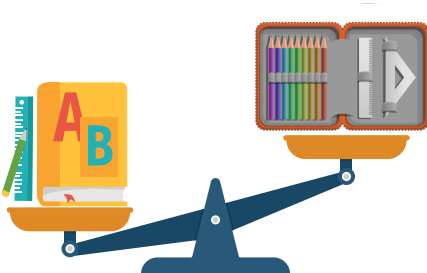
Die appel is _____ as die suurlemoen.



Die suurlemoen is _____ as die boeke.

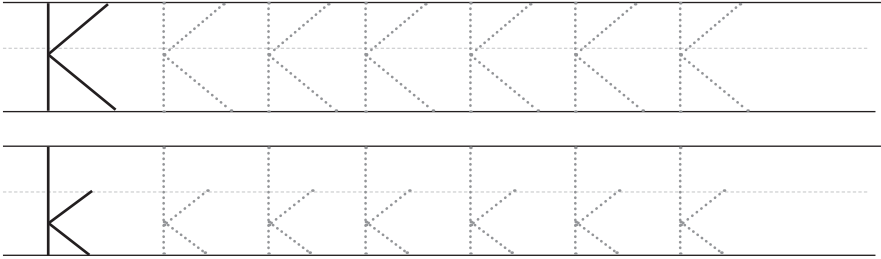


Die melk boks is _____ as die boeke.



Die potlood is _____ as die boeke.

Klanke = k woorde



Skryf jou eie twee woorde wat met “k” begin.



kroon



koning



kruis




kat





Bewerking


Aftrekking


Voltooi:


• $38 - 3 =$ 


* $66 - 3 =$ 


• $45 - 2 =$ 


* $54 - 2 =$ 


• $69 - 5 =$ 

* $83 - 3 =$ 

• $27 - 6 =$ 

* $95 - 4 =$ 

• $72 - 1 =$ 

* $17 - 5 =$ 

Week 20
Graad 2



Meervoude = s/e

Voltooi die sinne deur s of e aan te las.


Voorbeeld: Daardie _____ is baie warm.
kometers

= Daardie komberse is baie warm.


1. Ek het ses _____.
pou



2. Die _____ is in die opwasbak.
bord



3. Daar is twee _____.
piesang



4. Ons het 10 _____ by die huis.
boek



5. Die _____ is klaar geverf.
huis

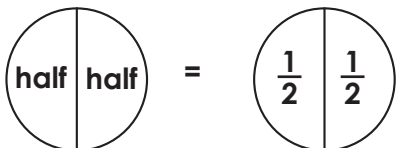


6. Die _____ eet baie gras.
donkie

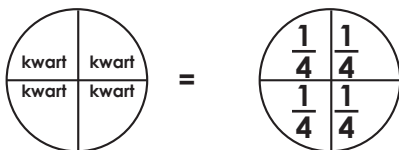


Breuke

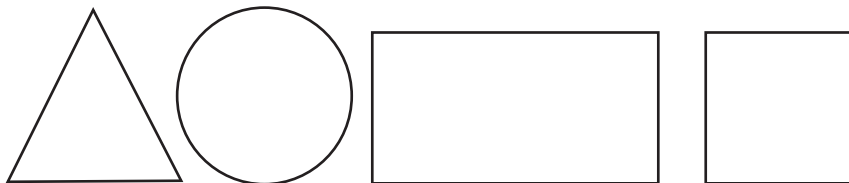
Die twee gelyke dele van 'n hele word halwes genoem.



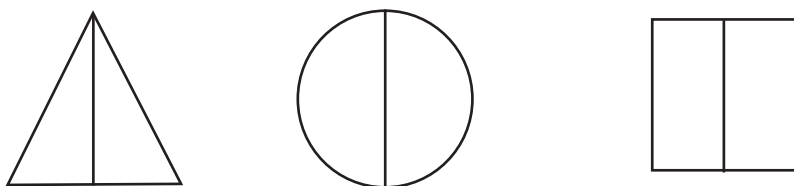
Die vier gelyke dele van 'n hele word kwarte genoem.




1. Trek lyne op elke vorm om dit in helftes te deel.



2. Kleur die helfte van elke vorm in.



3. Kleur een kwart van elke vorm.



Lees

Lees die storie en beantwoord die vrae.

Wat is 'n veilige plek?

As jy vind dat jy verlore is, of jy voel onveilig vir enige rede, en daar is nie 'n grootmens by jou wat jy kan vertrou nie. Dan moet jy 'n veilige vreemdeling vind om jou te help.

'n Goeie plek om 'n veilige vreemdeling te vind is by 'n veilige plek.



Die beste veilige plek is altyd in 'n besige openbare area. Maar as 'n vreemdeling jou agtervolg of jou probeer gryp: wees slim en skree so hard as wat jy kan, "Die vreemdeling wil my seer maak HELP!HELP!" Hardloop na 'n plek waar daar baie mense is. Moet nooit in 'n donker plek in hardloop nie.

1. Wat moet jy doen as jy verlore of onveilig voel?

2. Noem die plekke wat 'n veilige plek kan wees.

3. Watter woord moet jy skree as 'n vreemdeling jou probeer gryp?

4. Hoekom dink jy hierdie plekke word veilige plekke genoem?





Sigwoorde

Lees die leidrade hieronder en vind die antwoorde in die woord soek.

g	s	x	n	o	u
z	j	a	v	s	d
k	n	i	p	e	i
t	y	t	b	e	y
k	a	r	c	m	n
m	o	t	o	r	t

Leidrade:

1. Teenoorgestelde van *nee*
2. Nie later
3. Ry daarmee
4. Gebruik 'n skêr daarvoor
5. Visse bly in die...



Probleemoplossing

Skryf die sin se nommer en dan die antwoord.

1. 7 seuns loop oor die gras.

Hoeveel voete sien jy?

Sin nommer: _____

Daar is _____ voete.

2. Tom het 16 albasters. Hy gee vir my 5 albasters en 7 vir my broer.

Hoeveel albasters het hy oor?

Sin nommer: _____

Tom het _____ albasters oor.

3. Ma steek 20 kerse aan. Die wind blaas 13 kerse dood.

Hoeveel kerse brand nog?

Sin nommer: _____

Daar brand nog _____ kerse.

4. Oom Tom verkoop een boksie vir N\$5.

Hoeveel geld maak hy as hy 5 boksies verkoop?

Sin nommer: _____

Hy maak _____.

5. Ma het 'n ete. Sy gebruik 5 messe, 10 lepels, en 5 vurke.

Hoeveel eetgerei het sy gebruik?

Sin nommer: _____

Ma gebruik _____ eetgerei.



Contractions

Write the correct contractions for the underline words.

1. She is at the park. _____
2. Where is the ball? _____
3. There is the book. _____
4. He is not at school. _____
5. How is your food? _____
6. It is snowing! _____

Week 20

Grade 2

it's

he's

where's

she's

how's


there's

Choose two contractions in the block above and write sentences:



10x tafel

Help Newton om haar pad deur die bos te vind deur in tiene te tel tot by 100.

in	10	21	19	62	38	
	20	30	31	90	100	uit
	29	40	24	80	103	
	46	50	60	70	95	
	61	55	72	67	44	

Tel in tiene tot by 100

10, _____, _____, _____, _____, _____, _____, _____, _____

Verbind die regte vermenigvuldigings som met die regte optel som.

10×3

$10 + 10 + 10 + 10 + 10 + 10 + 10$

10×2

$10 + 10 + 10$

10×5

$10 + 10 + 10 + 10 + 10$

10×4

$10 + 10 + 10 + 10 + 10 + 10$

10×7

$10 + 10 + 10 + 10$

10×6

$10 + 10$



Kort/ lang klinkers

Lees die woorde en skryf hulle dan elkeen in die regte blok.

kat	goed	padda	bees	hond
vark	druive	blok	sif	slaap
	kaart		toon	

Kort klinkers

Lang klinkers

Hoeveel kort klinker woorde?

Hoeveel lang klinker woorde?

Stap vir stap probleme

Doen die somme so vinnig as wat jy kan.

$5 + 2 + 5 = \underline{\hspace{2cm}}$

$15 - 2 - 3 = \underline{\hspace{2cm}}$

$4 + 4 + 7 = \underline{\hspace{2cm}}$

$14 - 4 - 4 = \underline{\hspace{2cm}}$

$8 + 2 + 4 = \underline{\hspace{2cm}}$

$12 - 6 - 5 = \underline{\hspace{2cm}}$

$3 + 4 + 7 = \underline{\hspace{2cm}}$

$11 - 1 - 7 = \underline{\hspace{2cm}}$

$9 + 1 + 3 = \underline{\hspace{2cm}}$

$10 - 5 - 3 = \underline{\hspace{2cm}}$

$10 + 2 + 3 = \underline{\hspace{2cm}}$

$19 - 6 - 1 = \underline{\hspace{2cm}}$

$7 + 4 + 4 = \underline{\hspace{2cm}}$

$15 - 7 - 7 = \underline{\hspace{2cm}}$

Week 20

Gradd 2



Getalle

1. Hoeveel tiene en ene is daar?

$19 = \square T + \square E$

$20 = \square T + \square E$

$24 = \square T + \square E$

$23 = \square T + \square E$

$25 = \square T + \square E$

$22 = \square T + \square E$

2. Rangskik van die kleinste na die grootste.

5	10	14	11	18	29	7	20
7	13	30	16	16	4	12	20

3. Rangskik van die grootste na die kleinste.

15	5	10	21	30	11	0	27	8	19
10	0	6	9	17	1	11	15	12	21

4. Trek 'n sirkel om die grootste getal.

28 or 82

53 or 35

46 or 64

101 or 110

5. Trek 'n sirkel om die kleinste getal.

51 or 15

37 or 73

25 or 52

19 or 91



Success begins with education

Parents will be able to visit the website and watch daily videos or they can subscribe to our Zoshy Telegram channel to receive daily videos. One can also download the PDF version of the book on the website. Also watch our daily show on Active Kids to watch your favourite lessons.



<https://t.me/zoshyonline>



For extra perks!

How does it work?



Easy peasy steps to follow

Register at zoshy

You can save your favourite lessons and find them easier



- Step 1: Find us at www.zoshy.online or scan the QR code
- Step 2: Find your grade and select the year
- Step 3: Choose your language
- Step 4: Choose the week you want to learn out of
- Step 5: Choose lessons from what lessons there are
- Step 6: Download booklet if you do not have it
- Step 7: Watch and follow the teacher as she explains what to do in the book
- Step 8: Follow us on Facebook (Zoshy & Active Kids) to never miss a video
- Step 9: Subscribe to our Zoshy Telegram channel if you want to receive daily updates



www.zoshy.online

In collaboration with the Ministry of Education, Arts and Culture

PRINT

- 1** Turn the booklet to landscape.
- 2** Take a ruler & tear the booklet at the top long fold.
- 3** Fold the booklet in half.
- 4** The learning journey can start.

STEPS
HOW TO TEAR & USE
THE BOOKLET



Hoe om 'n

HELD TE WEES

Beskerm ander,
beskerm jouself



ALLE HELDE

DRA MASKERS

